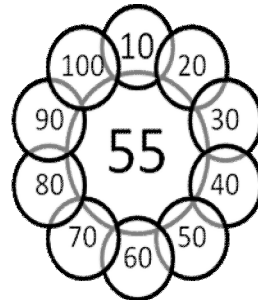
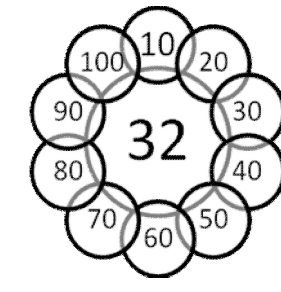
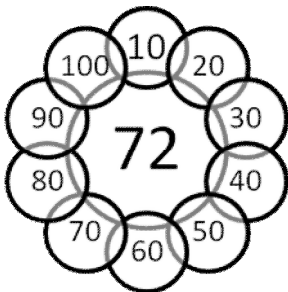
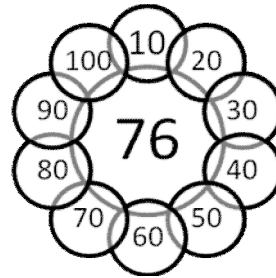
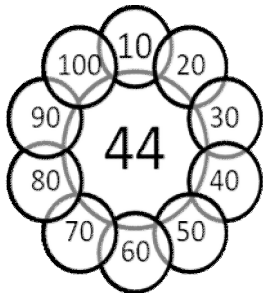
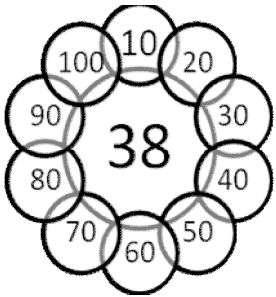
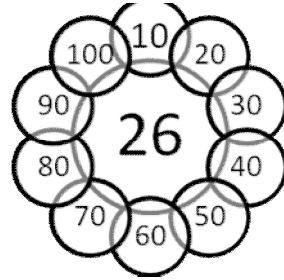
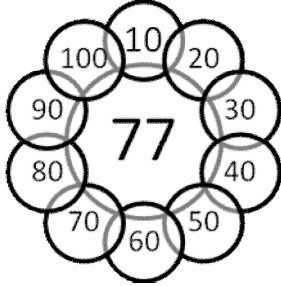
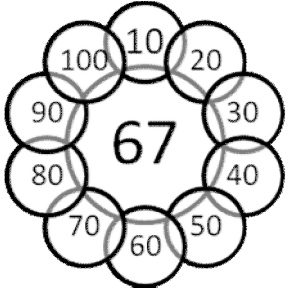
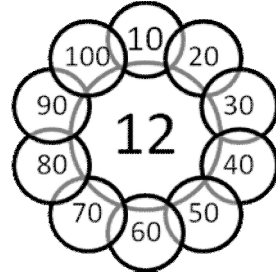
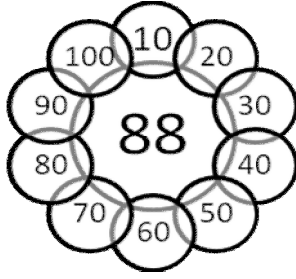
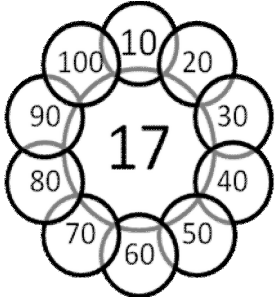




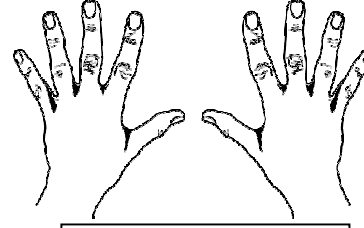
## ONLUĞA YUVARLAMA

Aşağıdaki sayıları ve en yakın olduğu onluğu kırmızı kalemle boyayın.



## UZUNLUK ÖLÇÜ BİRLERİ

- \* Aşağıdaki görsellerdeki uzunluk ölçü birimlerinin adlarını yazınız
- \* Standart olmayan uzunluk birimlerini boyayınız.



- \* Aşağıya kendi bir karışınızı, bir kulaçınızı, bir ayağınızı, bir adımınızı ve bir parmağınızı ölçün, kaç cm geldiğini yazınız.

Bir karışımın uzunluğu ..... cm'dir.

Bir kulaçımın uzunluğu ..... cm'dir.

Bir ayağımın uzunluğu ..... cm'dir.

Bir adımımın uzunluğu ..... cm'dir

Bir parmağımın uzunluğu ..... cm'dir.

Benim boyumun uzunluğu .....cm'dir